

Directions (Q.Nos. 18-22) Find the odd number/letter/figure/number pair from the given alternatives.

18. 1) Wool 2) Feather 3) Hair 4) Grass
19. 1) Sport: Ground 2) Cinema : Screen 3) Drama : Stage 4) Rubber : Erase
20. 1) 32-41 2) 62-44 3) 46-28 4) 33-56
21. 1) EDHG 2) LKON 3) UVWX 4) QPTS
22. 1) IJNR 2) OTWZ 3) ZCFI 4) GJMP
23. Find out the set of number amongst the four sets of numbers given in the alternatives which is the most like the set given in the question.
Given set (23, 51,17)
1) (29, 57,13) 2) (24, 53,17) 3) (29, 57,14) 4) (21, 51,17)
24. Find out the number that does not belong to the group of numbers for lack of common property.
1) 131 2) 151 3) 161 4) 171
25. In the following question, number of letters are skipped in between by a particular rule. Which of the following series observes the rule?
1) NPRT 2) PQNS 3) ORTV 4) LNPS
26. Arrange words alphabetically as in a dictionary order.
1. Animate 2. Animosity 3. Anguish
4. Ankle 5. Announce
1) 3,1,4,5,2 2) 3,1,2, 4, 5 3) 1, 2, 5, 3, 4 4) 4, 2, 5,1, 3
27. Arrange the following words as per order in the dictionary.
1. Preach 2. Praise 3. Precinct
4. Precept 5. Precede
1) 2,1, 5, 4, 3 2) 2,1, 3, 4, 5 3) 1, 2, 5, 4, 3 4) 2, 5,1, 4, 3
28. Which one set of letters when sequentially placed at the gaps in the given letter series shall complete it?
_b_bca_a_ab_
1) acbca 2) babac 3) abbca 4) accbc
- Directions (Q.Nos. 29-32)** A series is given with one term missing. Choose the correct alternative from the given ones that will complete the series.
29. 544, 509, 474, 439, ?
1) 404 2) 414 3) 420 4) 445
30. 80, 10, 70, 15, 60, ?
1) 20 2) 25 3) 30 4) 50
31. J14, L16, ?, P20, R22, T24
1) S24 2) N18 3) M18 4) V26
32. AZ, CX, FU, ?
1) IR 2) IV 3) JQ 4) KP
33. Find the wrong number in the series.
4,10,22,46,46,190,382
1) 4 2) 10 3) 96 4) 382
34. Ravi's brother is 3 yr senior to him. His father was 28 yr of age when his sister was born while his mother was 26 yr of age when he was born. If his sister was 4 yr of age when his brother was born, what were the ages of Ravi's father and mother respectively when his brother was born?
1) 32 yr, 23 yr 2) 32 yr, 29 yr 3) 35 yr, 29 yr 4) 35 yr, 33 yr
35. Shyam ranked ninth from the top and thirty-eighth from the bottom in a class. How many students are there in the class?
1) 45 2) 46 3) 47 4) 48
36. If Ajay's son is the uncle of Sunn's son, what is the relationship between Ajay and Sunil?
1) Cousin 2) Brother 3) Father and son
4) Grandfather and grandson
37. If you write down all the numbers from 1 to 100, then how many times do you write 3?
1) 11 2) 18 3) 20 4) 21
38. A player holds 13 cards of four suits, of which seven are black and six red. There are twice as many diamonds as spades and twice as many hearts as diamonds. How many cards does he hold?
1) 4 2) 5 3) 6 4) 7

39. If + means \times , \times means \div and \div means +, then
 $48 \times 4 \div 7 + 8 - 2 = ?$
 1) 3 2) -5 3) 35 4) 16
40. If February 1, 2004 is Wednesday, what day is March 3, 2004?
 1) Monday 2) Sunday 3) Saturday 4) Friday

Directions (Q.Nos. 41-42) Select the missing number from the given responses.

41.

85	20	5
126	24	6
175	?	7

- 1) 22 2) 24 3) 26 4) 28

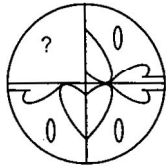
42.

12	(47)	21
10	(52)	4
64	(?)	24

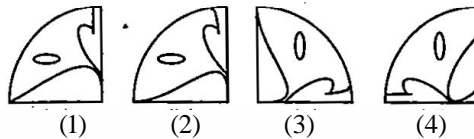
- 1) 16 2) 40 3) 62 4) 83

43. Complete the given figure/pattern/design by choosing the correct alternatives.

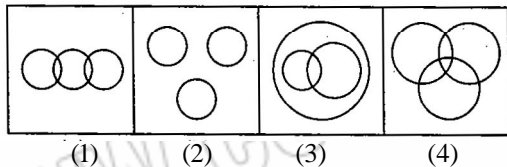
Question Figure




Answer Figures



44. At what time between 5 and 5 : 30 are the hands of a clock 5 min apart?
 1) $20 \frac{4}{11}$ min past 5 2) $21 \frac{7}{11}$ min past 5
 3) $20 \frac{8}{11}$ min past 5 4) $21 \frac{9}{11}$ min past 5
45. Going 50 m to the South of her house, Radhika turns left and goes another 20 m. Then, turning to the North, she goes 30 m and then starts walking to her house. In which direction is she walking now?
 1) North-West 2) North 3) South-East 4) East
46. Which of the following diagram represents of relationship between Flowers, Cloths and White?

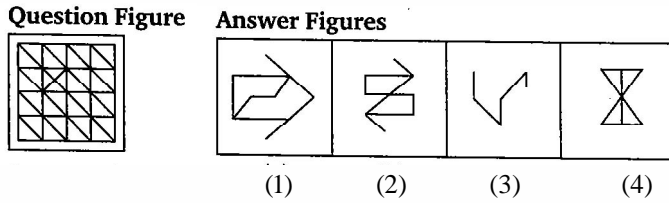


47. How many triangles are there in the given figure?




- 1) 5 2) 4 3) 3 4) 8

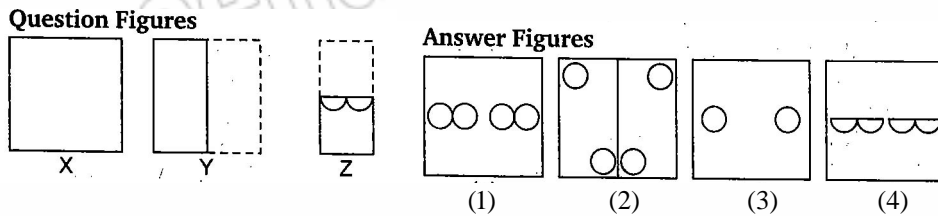
48. From the given answer figures, select the one in which the question figure is hidden/embedded.



49. Which of the following is the correct mirror image of the given figure?



50. A piece of paper is folded and cut as shown below in the question figures. From the given answer figures, indicate how it will appear when opened.



GENERAL AWARENESS

51. Postal voting is otherwise called :
 (1) plural voting (2) proxy voting
 (3) weighted voting (4) secret voting
52. Stability of the Government is assured in :
 (1) Parliamentary Form of Government.
 (2) Presidential Form of Government.
 (3) Plural Executive System (4) Direction Democracy
53. According to the Indian Constitution, the vacancy in the office of the President of India shall be filled within :
 (1) 1 month (2) 6 months (3) 3 months (4) 1 year
54. Who is the Tennis star to become World No. 1 seed at the youngest age?
 (1) Steffi Graf (2) Monica Seles (3) Chris Evert (4) Martina Hingis
55. What is "Vishva Mohini"?
 (1) Name for India's Beauty Queen
 (2) The title given to Lata Mangeshkar for her contribution to music
 (3) An Indian ship
 (4) A famous book on Indian dances
56. The main function of the World Trade Organisation (WTO) is :
 (1) enforcing of Uruguay Round Agreements
 (2) facilitating multilateral trade relations of member countries and reviewing trade policies
 (3) administering trade dispute settlement procedures (4) None of the above
57. Name the author of the book A Passage to England :
 (1) E.M. Forster (2) Nirad C. Choudhary
 (3) Vikram Seth (4) Eric Segal
58. Which is the long-range missile that was tested by Pakistan in the wake of India testing Agni II ?
 (1) Ghauri II (2) Shaheen 1 (3) Hatf I (4) Hatf II
59. The Indian Naval Ship being converted into a maritime museum is :
 (1) Sagar Samrat (2) Kanishka (3) Samrat Ashoka (4) Vikrant